


Matematika 1. ročník od 15. 3. do 19. 3. 2021

PO 15. 3.	Pracovní listy
ÚT 16. 3.	Matematika str. 30/ celá
ST 17. 3.	Matematika str. 31/ celá
ČT 18. 3.	Matematika str. 32/ celá
PÁ 19. 3.	Pracovní listy – desítky, jednotky

Vážení rodiče a milé děti,

srdečně Vás zdravím u matematiky. Tento týden dokončíme učebnici. Seznámíme se s desítkami a jednotkami, se kterými si budeme hezky hrát a povídat si o nich. Další týden se podíváme do učebnice nové, kde si budeme hrát na obchod a poznávat zajímavé počítání. Vše budeme dělat s láskou a společně, proto posílám srdíčka pro radost. Mějte se hezky.

Vaše paní učitelka Helena



1 A

$5 + 3 =$

$3 + 1 =$

$3 + 0 =$

$5 - 3 =$

$8 - 3 =$

$8 - 6 =$

$8 + 0 =$

$8 - 0 =$

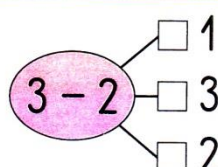
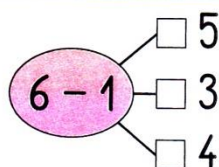
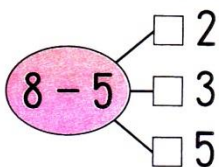
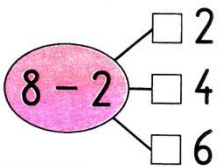
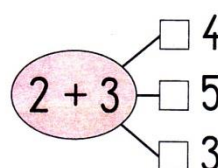
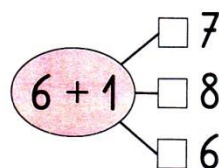
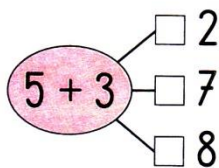
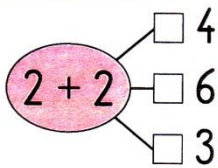
$2 + 6 =$

$1 - 1 =$

$5 + 0 =$

$8 - 8 =$

2 A



3 A +, -

$4 - 2 = 6$

$5 - 3 = 8$

$4 - 1 = 5$

$0 + 6 = 6$

$7 - 3 = 4$

$7 - 2 = 5$

$8 - 1 = 7$

$6 - 3 = 3$

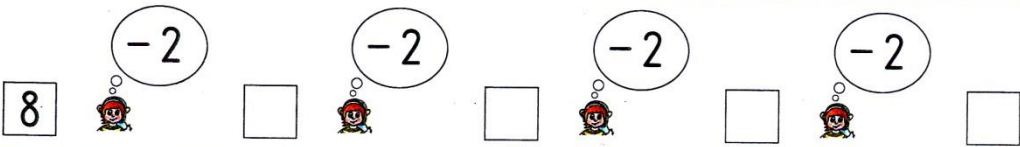
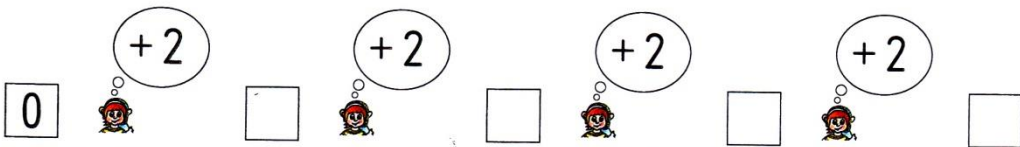
$5 - 4 = 1$

$4 - 1 = 3$

$7 - 1 = 8$

$8 - 8 = 0$

4 A





1 A

10 ○, 6 □, 2 △.

2 <, >, =.

5	10	6	3	10	0	7	7	8	10
9	6	2	2	9	4	10	1	9	9
8	10	0	4	8	7	1	3	5	4
0	4	10	9	1	1	0	0	6	8

3 A

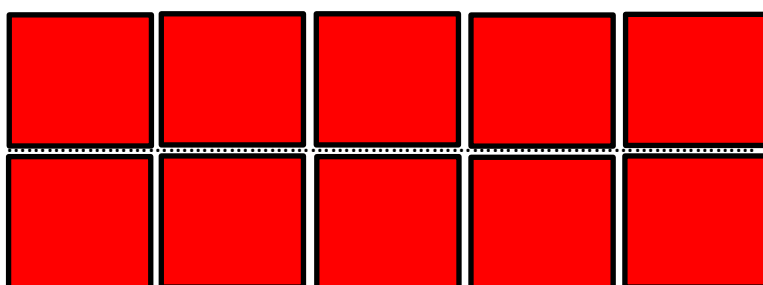

4	1	_____
9	6	_____

2	3	_____
10	7	_____

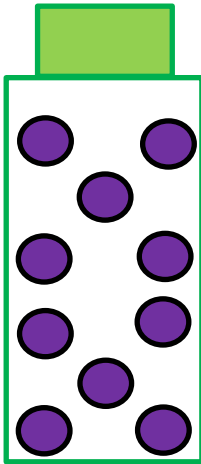
4 A

9			6		2	3			10			7
7	8			8	7			4		4		6
	9		7	5				9			7	8

PÁ 19. 3. Lahvičková desítka



1 desítka



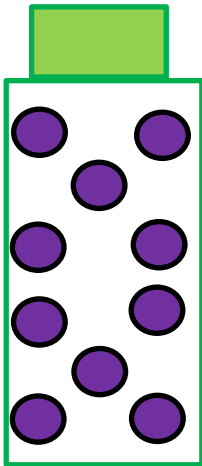
1 jednotka




$$10 + 1 = 11$$

.....

1 desítka



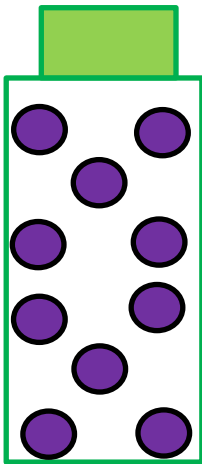
2 jednotky



$$10 + 2 = 12$$

.....

1 desítka



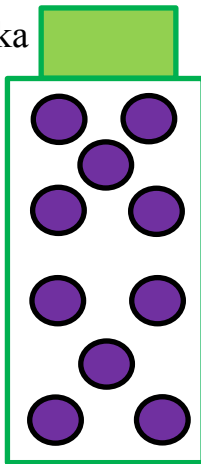
3 jednotky




$$10 + 3 = 13$$

.....

1 desítka




4 jednotky




$$10 + 4 = 14$$

.....

1 desítka



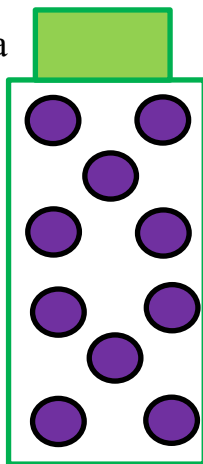
5 jednotek




$$10 + 5 = 15$$

.....

1 desítka



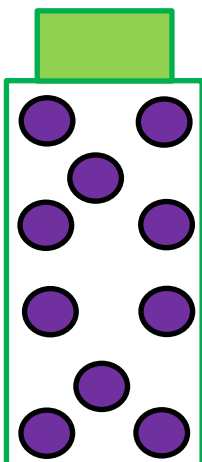
6 jednotek




$$10 + 6 = 16$$

.....

1 desítka



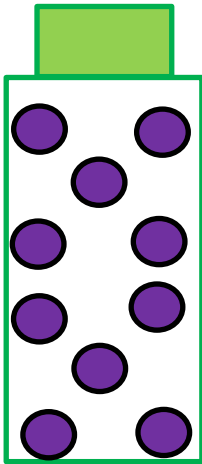
7 jednotek




$$10 + 7 = 17$$

.....

1 desítka



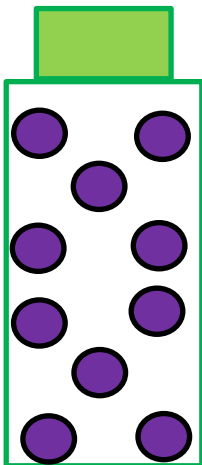
8 jednotek



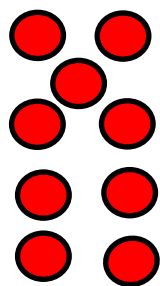
$$10 + 8 = 18$$

.....

1 desítka



9 jednotek



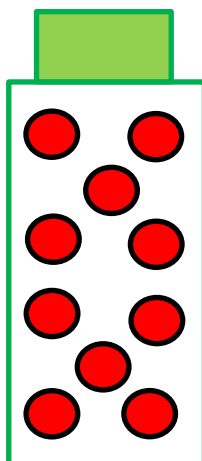
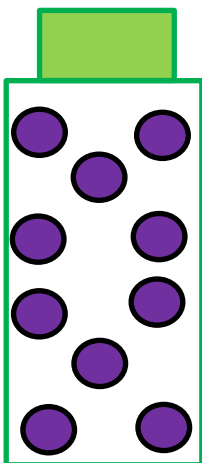
$$10 + 9 = 19$$

.....

1 desítka

+

1 desítka



$$10 + 10 = 20$$

.....